

Year 1 Maths Activity Mat

1


Section 1

What's next?

10	20	30				
----	----	----	--	--	--	--

Section 2

Add 1 more flower.



There would be flowers altogether

Section 3

What's the missing number?

$$10 - \square = 6$$



Section 4


Which line is the longest?

A

B

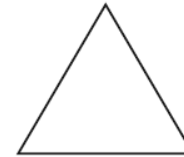
Section 5

If Lisa has 6 apples and she shares them equally with Sarah, how many apples will they have each?



Section 6

Colour half of these shapes.



Section 7

Circle the odd numbers:

2 8 13
7 1 12

Section 8

Fill in the boxes:

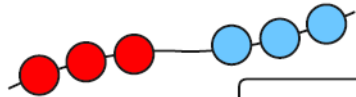
$$18 + \square = 20$$

$$15 + \square = 20$$

Year 1 Maths Activity Mat

Section 1

Write a number sentence to show how many beads there are altogether.



Section 3

If today is Monday, what is it tomorrow?

Put a circle around the correct day.

Tuesday Wednesday Sunday


Section 4

Imagine seeing 1 elephant at the zoo.

How many legs would you see?

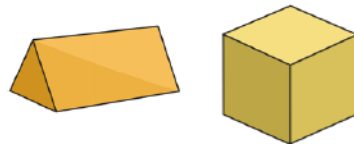
Section 2

Draw and colour the next 2 cars in the pattern.



Section 5

Draw lines to match the name and the shape.



cube

triangular prism

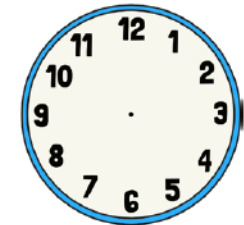
Section 6

Which jug is full?
Tick the correct one.



Section 7

Make this clock show 4 o'clock.



Section 8

How much money is here?



Year 1 Maths Activity Mat

Section 1

I have 2 pairs of shoes.

How many shoes is that altogether?



Section 4


I have 16p and I lose 5p.

How much money have I got left?



Section 7

What time is it?



5 o'clock

Half past 6

Half past 5

Section 2


Shep had 3 dog biscuits.

Rover had 4. How many more biscuits did Rover have?



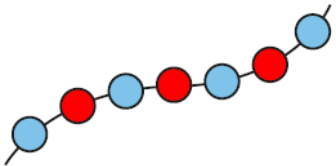
Section 5

Cut the cake in half.



Section 3

Count the beads and write the number.



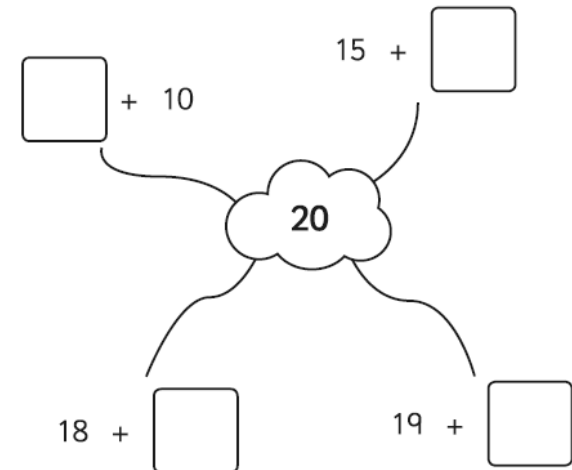
Section 6

What numbers are missing?

9	8	7	6			3		1
---	---	---	---	--	--	---	--	---

Section 8

Complete the number pairs:



Year 1 Maths Activity Mat


Section 1

There are 24 in a packet.

Grace eats 5.

Sara eats 6.

How many are left in the packet?



Section 2

Match the numbers with their names:

26 eighteen

15 thirty-one

31 twenty-six

18 fifteen

Section 5

Draw the coins you need to make £1.25.

Section 6

Choose the correct symbol to complete the number sentence.

- x +

12 15 = 27

2 4 = 8

Section 3

Which would weigh more? Circle the heaviest.



or



or



or



Section 4

30 → 10 less →

55 → 10 less →

83 → 10 less →

32 → 10 less →

Section 7


Draw a picture to show this:
 $10 - 7 = 3$

Section 8


It's Mickey's birthday in 2 days' time. Today is Saturday. What day is Mickey's birthday?

Year 1 Maths Activity Mat


Section 1
Jed had 7 football stickers.
Jamie had double that.
How many stickers did Jamie have?




Section 2
I buy a packet of cakes for £2.
How much would 2 packets cost?




Section 3
Colour in the juice to show the jug is one quarter full.



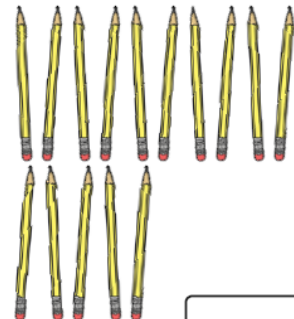
Section 4
Share these bananas equally into 4 groups.
How many bananas in each group?



Section 5
How long is the pencil?



Section 6
How many lots of ten are there in 15?



Section 7
Maya is 7 years old.
Her sister is 4 years older.
How old is her sister?

Section 8
8 tomatoes were shared equally onto each slice.
How many tomatoes were on each slice?

