



Maths Homework
this week is about:

**Adding Numbers
Mentally**

Name:

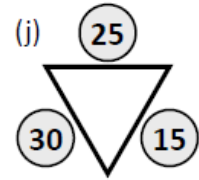
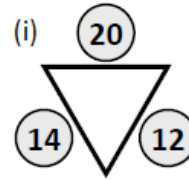
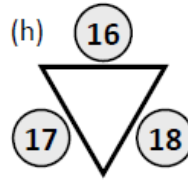
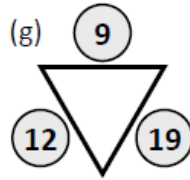
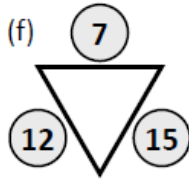
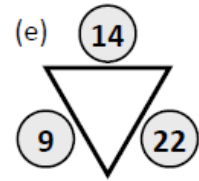
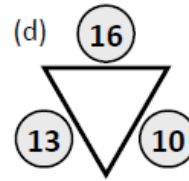
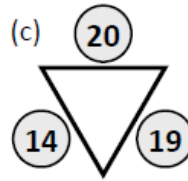
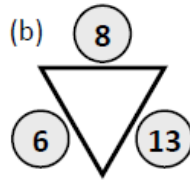
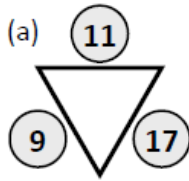
Date:

Teacher:

Year
3

For all the questions on this sheet, try to work out the answers in your head.

(1) For each question, add the three numbers in the circles. Write your answer in the triangle.



(2) For each question, add the two numbers on the signs. Write your answer in the top sign.

