



Maths Homework  
this week is about:

### Multiplication Problems


Name:


Date:


Teacher:

Year  
**3**







- (1) Write a multiplication statement to work out the number of stars in each diagram. Then find the answer to each statement.

(a)   
 ×  =

(b)   
 ×  =

(c)   
 ×  =

- (2) Multiply the pair of numbers in each traffic light. Write your answer in the bottom light.

(a)  (b)  (c)  (d)  (e)  (f) 

- (3) Find the missing numbers in each of these multiplication questions.

(a)  × 4 = 28      (b) 3 ×  = 21  
(c) 12 ×  = 96      (d)  × 8 = 48  
(e) 5 ×  = 15      (f) 4 ×  = 16  
(g)  × 8 = 16      (h)  × 8 = 24  
(i) 4 ×  = 44      (j)  × 8 = 80