

Recognise Equal Groups

7. Which image is each child describing?



I have 4 equal groups of 8.



I have 8 equal groups of 2.




I have 5 equal groups of 4.


A.



B.




C.



VF
HW/Ext

8. Complete the sentences for each image.

A.




I have _____ equal groups of 6.

B.



I have _____ equal groups of 8.

C.



I have 4 equal groups of _____.



VF
HW/Ext

9. True or false? Heidi is correct.



My money is grouped in to 2 purses, but they are not equal groups.



Explain your answer.



RPS
HW/Ext

Farming Fun!



Sophie's dad, Ollie and Freddie's mum, Leanne are heading off on the adventure of a life time. They have sold their houses in town, and left their jobs. Sophie and Freddie are changing schools.

They are all going to live together on a farm!



There so much to think about and lots of maths to be done!



1. Ollie has begun to plan the sheep shed which has 12 stalls. For their comfort and well-being, Ollie only wants to keep a maximum of 10 sheep per stall.



Ollie has 63 sheep to put in the sheep shed. How many sheep stalls will there be? How many spare stalls will be left?

sheep stalls

spare stalls

2. Ollie decides to share the sheep equally between the sheep stalls. How many sheep will be in each sheep stall?



3. The spare stalls will be used for the pigs. The farm has 20 pigs. How many pigs will there be in each stall?

Hint: use the empty stalls below to help you!
