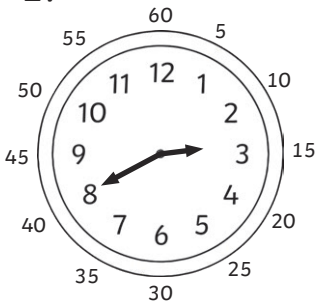


# Bullet Train Times - Minutes To

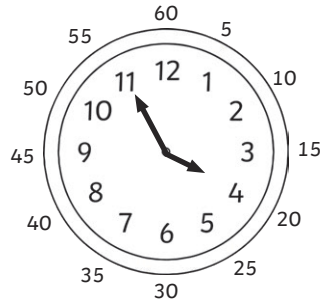
What times are the trains due? Write the time in words.

1.




minutes to 3

2.




minutes to 4

3.



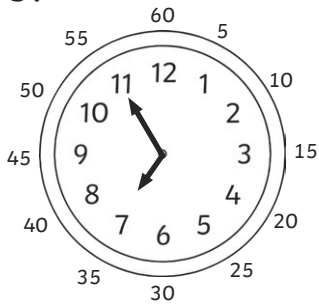
minutes to 5

4.

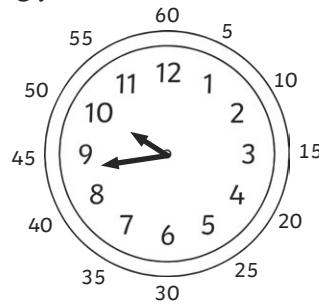


minutes to 4


5.



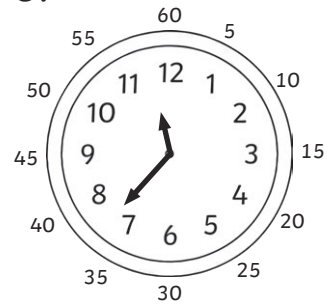
6.



7.




8.




Draw the hands on these clocks to show the exact time (don't forget the minute hand is the big one and the hour hand is the small one!)

9.




14 minutes to 3

10.




21 minutes to 9

11.



7 minutes to 7

12.

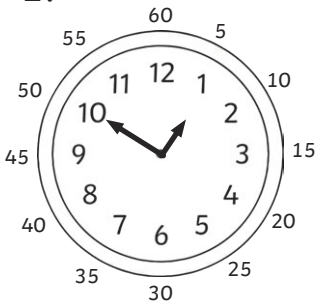


18 minutes to 4

# Bullet Train Times - Minutes To

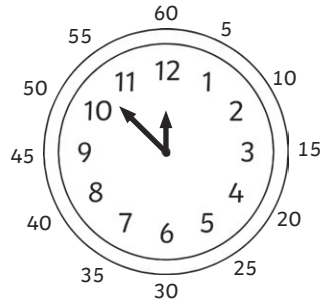
What times are the trains due? Write the time in words.

1.




\_\_\_\_\_

2.



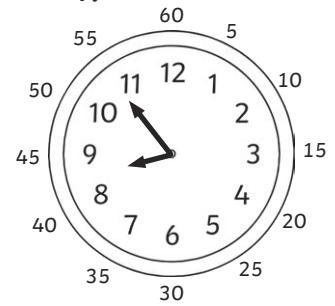
\_\_\_\_\_

3.



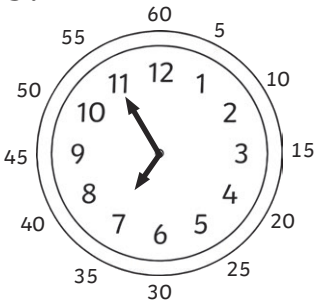
\_\_\_\_\_

4.



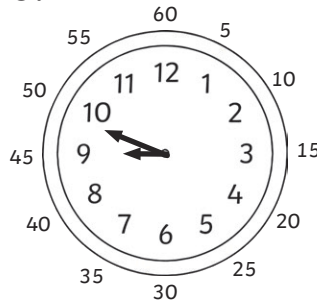
\_\_\_\_\_

5.




\_\_\_\_\_

6.



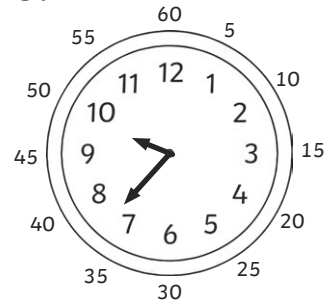
\_\_\_\_\_

7.



\_\_\_\_\_


8.



\_\_\_\_\_


Draw the hands on these clocks to show the exact time (don't forget the minute hand is the big one and the hour hand is the small one!)

9.




**14 minutes to 3**

10.




**21 minutes to 9**

11.



**7 minutes to 7**

12.

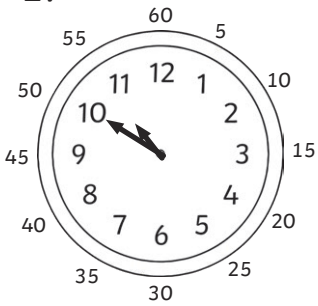


**18 minutes to 4**

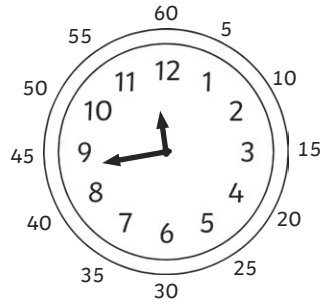
# Bullet Train Times - Minutes To

What times are the trains due? Write the time in words.


1.



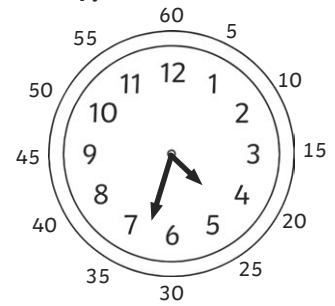
2.




3.




4.




5.



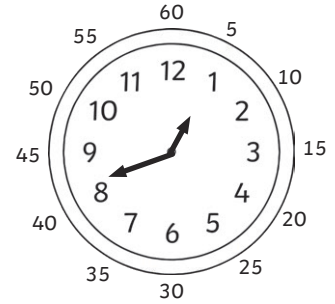
6.



7.




8.




Draw the hands on these clocks to show the exact time (don't forget the minute hand is the big one and the hour hand is the small one!)


9.



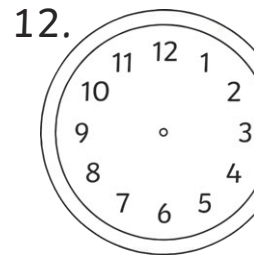
10.



11.



12.




**12 minutes to 4**

**19 minutes to 8**


**14 minutes to 5**

**17 minutes to 9**

13. A train was supposed to arrive at 18 minutes to 5, but was delayed by 13 minutes. Draw on the hands to show when it will arrive.



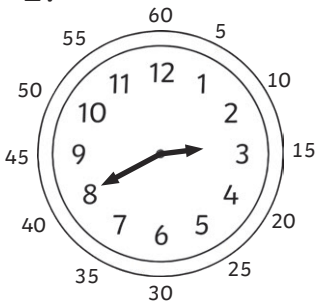
14. Another train was supposed to arrive at 27 minutes to 3, but was delayed by 7 minutes. Draw on the hands to show when it will arrive.



# Bullet Train Times - Answers

What times are the trains due? Write the time in words.

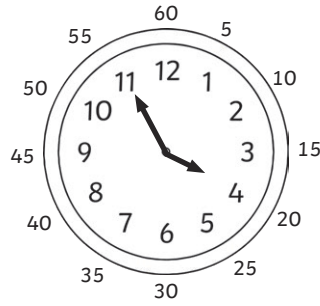
1.



**20**

**minutes to 3**


2.



**5**

**minutes to 4**


3.



**10**

**minutes to 5**

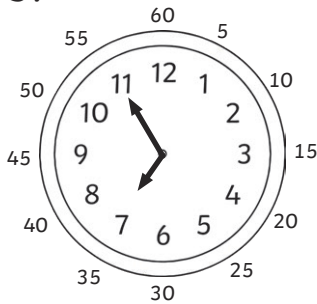
4.



**10**

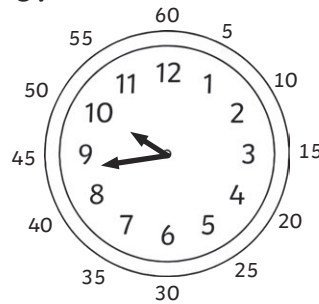
**minutes to 4**

5.




**5 minutes to 7**

6.



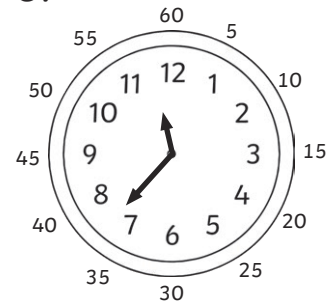
**17 minutes to 10**

7.



**22 minutes to 11**


8.



**23 minutes to 12**


Draw the hands on these clocks to show the exact time (don't forget the minute hand is the big one and the hour hand is the small one!)

9.




**14 minutes to 3**

10.




**21 minutes to 9**

11.



**7 minutes to 7**

12.

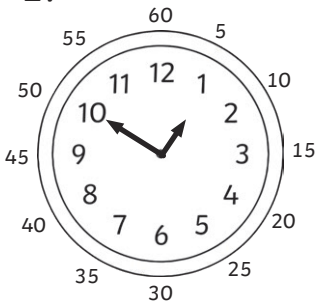


**18 minutes to 4**

# Bullet Train Times - Answers

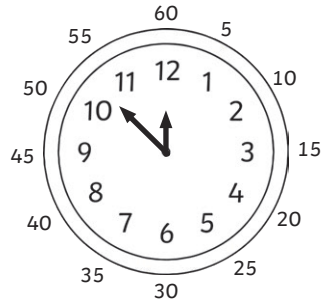
What times are the trains due? Write the time in words.

1.




**10 minutes to 1**

2.



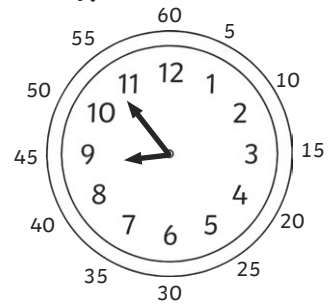
**7 minutes to 12**

3.



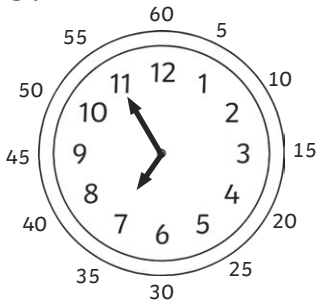
**23 minutes to 5**

4.



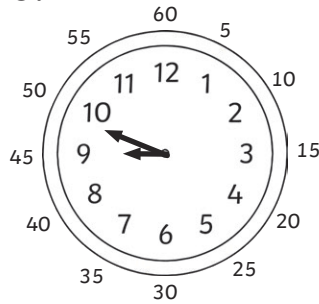
**6 minutes to 9**

5.




**5 minutes to 7**

6.



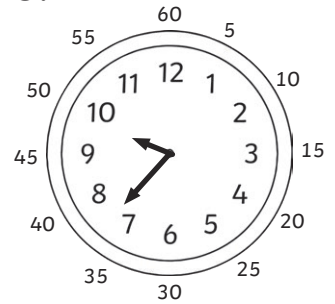
**12 minutes to 9**

7.



**28 minutes to 3**


8.



**24 minutes to 10**


Draw the hands on these clocks to show the exact time (don't forget the minute hand is the big one and the hour hand is the small one!)

9.




**14 minutes to 3**

10.




**21 minutes to 9**

11.



**7 minutes to 7**

12.

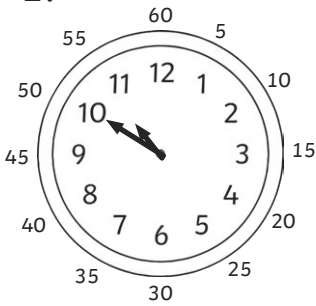


**18 minutes to 4**

# Bullet Train Times - Minutes To

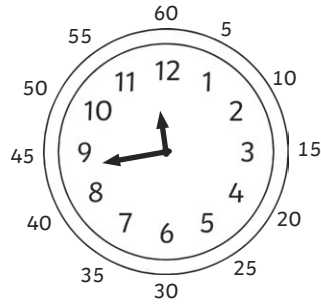
What times are the trains due? Write the time in words.

1.




10 minutes to 11

2.



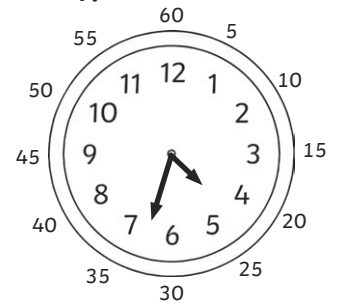
17 minutes to 12

3.




10 minutes to 10

4.




27 minutes to 5

5.




18 minutes to 7

6.




23 minutes to 3

7.



29 minutes to 7


8.



19 minutes to 1


Draw the hands on these clocks to show the exact time (don't forget the minute hand is the big one and the hour hand is the small one!)

9.




**12 minutes to 4**

10.




**19 minutes to 8**

11.



**14 minutes to 5**

12.



**17 minutes to 9**

13. A train was supposed to arrive at 18 minutes to 5, but was delayed by 13 minutes. Draw on the hands to show when it will arrive.



14. Another train was supposed to arrive at 27 minutes to 3, but was delayed by 7 minutes. Draw on the hands to show when it will arrive.

