
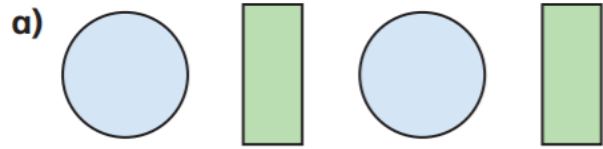
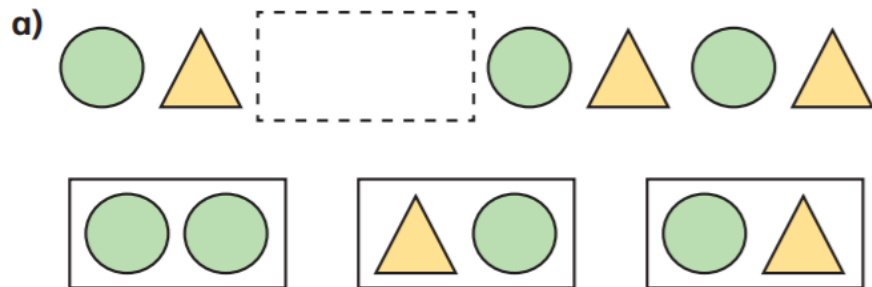


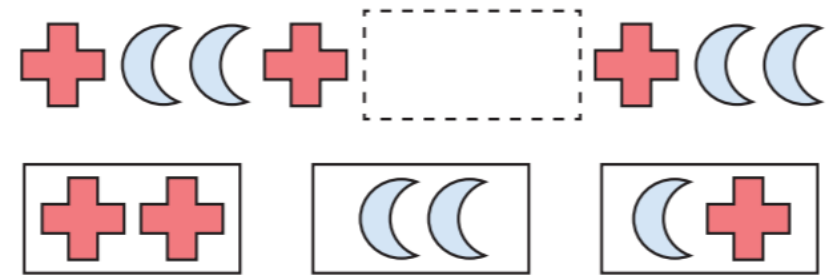
1 Draw the next two shapes in each pattern.



2 Which shapes fit in each pattern?



b)



3



My pattern goes:  
circle, triangle, square,  
then it repeats.

a) Draw the first 9 shapes in Rosie's pattern.

b) What is the name of the 10th shape in the pattern?

c) What is the name of the shape to the right of the 5th shape?

4

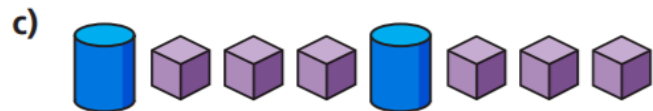
Mo makes a pattern using 4 rectangles, 4 triangles and 4 circles.

What could Mo's pattern be?

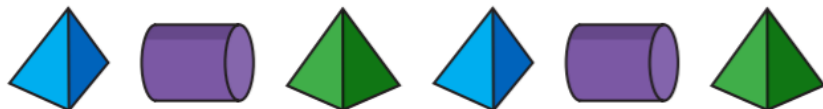
Draw two different possibilities.



1 Draw the next shape in each pattern.



2 What is the name of the 3rd shape in the pattern?



3 Here is a pattern made with 3D shapes.



a) Write the name of the 4th shape in the pattern.

b) What would the 13th shape in the pattern be?

4 Which row shows the pattern?

a) cube, sphere, cone, cube, sphere, cone

