





1 Look at the grid. Draw the figure that is:

a next to 

b under 

c above 

d between  and 


e below 

f next to 

2 If you are the  where would you say the:

a  is? It is _____ me.

b  is? It is _____ me.

c  is? It is _____ me.