

1) Match up the times.



11:00



07:15

7:15 a.m.



half past 9
at night

21:30



11 o'clock in the
morning

2) Fill in the gaps below.

a) 08:45 quarter to nine in the _____

b) 16:10 ten past four in the _____

c) 21:40 twenty to ten at _____

d) ___:15 3:15 p.m.

e) 19:___ five to eight in the evening

f) ___:___ twenty to seven in the morning

g) ___:___ 10:45 a.m

3) Lucy has started writing a diary about her day yesterday. She writes the time in words and also using 24-hour time.


Time in Words	24-Hour Time	What I Did
seven o'clock in the morning	07:00	I got out of bed.

Either use the activity sheet, your maths book or a sheet of paper to write your own diary about what you did yesterday.

1) Match up the times.




11:00




07:15

7:15 a.m.



half past 9
at night

21:30



11 o'clock in the
morning

2) Fill in the gaps below.

a) 08:45 quarter to nine in the _____

b) 16:10 ten past four in the _____

c) 21:40 twenty to ten at _____

d) ___:15 3:15 p.m.

e) 19:___ five to eight in the evening

f) ___:___ twenty to seven in the morning

g) ___:___ 10:45 a.m

3) Lucy has started writing a diary about her day yesterday. She writes the time in words and also using 24-hour time.

Time in Words	24-Hour Time	What I Did
seven o'clock in the morning	07:00	I got out of bed.

Either use the activity sheet, your maths book or a sheet of paper to write your own diary about what you did yesterday.


- 1) Mitchell has been converting the time in words to 24-hour time. His friend tells him that he has made some mistakes. Spot the wrong answers and explain the mistakes Mitchell has made.



five minutes past 8 in the morning	08:05
ten to 9 in the evening	21:50
quarter to 6 in the morning	05:45
twenty minutes past 11 in the evening	11:20

- 2) I am thinking of a time. It is later than 2 o'clock in the afternoon but before 17:45.
a) Tick all the times it could be.

3:15 a.m.



15:15

five o'clock in the evening

- b) There is one time that it could be but you cannot be certain. Explain why.

- 3) Two friends are discussing time.



Isla

It is after midday. The time is quarter past the hour. If I wrote the time using the 24-hour clock, there couldn't be the digit 8 in the time.

You aren't right. I can think of at least two times that it could be.



Kiran

Who is correct? Prove your answer.


- 1) Mitchell has been converting the time in words to 24-hour time. His friend tells him that he has made some mistakes. Spot the wrong answers and explain the mistakes Mitchell has made.



five minutes past 8 in the morning	08:05
ten to 9 in the evening	21:50
quarter to 6 in the morning	05:45
twenty minutes past 11 in the evening	11:20

- 2) I am thinking of a time. It is later than 2 o'clock in the afternoon but before 17:45.
a) Tick all the times it could be.

3:15 a.m.



15:15

five o'clock in the evening

- b) There is one time that it could be but you cannot be certain. Explain why.

- 3) Two friends are discussing time.



Isla

It is after midday. The time is quarter past the hour. If I wrote the time using the 24-hour clock, there couldn't be the digit 8 in the time.


You aren't right. I can think of at least two times that it could be.



Kiran

Who is correct? Prove your answer.

1) The big hand of the clock has fallen off!




- a) Write 3 different times it could be.
Write your answer in both 12-hour and 24-hour time.
- b) Do you think it could be 07:55?
Explain your reasoning.

2) Sonia, Sarah and Sandeep are going on holiday together.

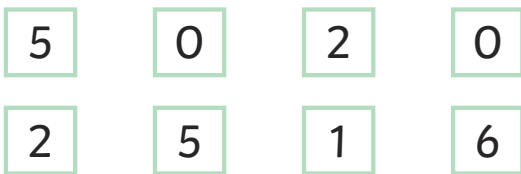
Sonia, "I left my house at 14:55 and it took me 65 minutes to get to the airport."

Sarah, "I left my house at 2:45 p.m. and it took me 90 minutes to get to the airport."

Sandeep, "The clock below shows the time I left my house to go to the airport. The journey took me 55 minutes."




- a) Who arrived at the airport first?
- b) How many minutes were they waiting for until both other people had arrived?
- 3) Use these digits to write two 24-hour times, one which is before midday and one after midday. Write each time in words too.



	24-Hour Time	Time in Words
Before Midday	:	
After Midday	:	

1) The big hand of the clock has fallen off!




- a) Write 3 different times it could be.
Write your answer in both 12-hour and 24-hour time.
- b) Do you think it could be 07:55?
Explain your reasoning.

2) Sonia, Sarah and Sandeep are going on holiday together.

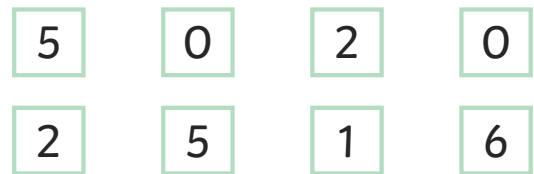
Sonia, "I left my house at 14:55 and it took me 65 minutes to get to the airport."

Sarah, "I left my house at 2:45 p.m. and it took me 90 minutes to get to the airport."

Sandeep, "The clock below shows the time I left my house to go to the airport. The journey took me 55 minutes."



- a) Who arrived at the airport first?
- b) How many minutes were they waiting for until both other people had arrived?
- 3) Use these digits to write two 24-hour times, one which is before midday and one after midday. Write each time in words too.



	24-Hour Time	Time in Words
Before Midday	:	
After Midday	:	