

# Wednesday - Maths



Look at the coins. Which has the bigger value?  
Put a circle around the correct answer.

	or	
	or	
	or	
	or	
	or	
	or	

# Wednesday - Maths



Look at the coins. Which has the bigger value?








Use < > =

# Wednesday - Maths



Write in the correct symbol to make the calculations below correct.

	<input type="text"/>	<b>5p</b>
	<input type="text"/>	<b>4p</b>
<b>7p</b>	<input type="text"/>	
<b>6p</b>	<input type="text"/>	
<b>2p</b>	<input type="text"/>	
	<input type="text"/>	<b>4p</b>
	<input type="text"/>	<b>9p</b>
<b>3p</b>	<input type="text"/>	