
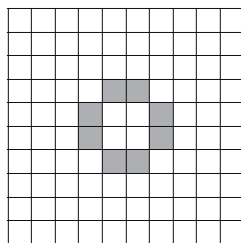


What percentage of each shape is coloured in?


1.



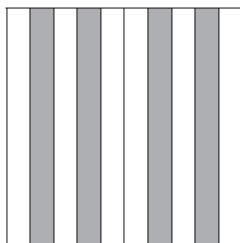
2.



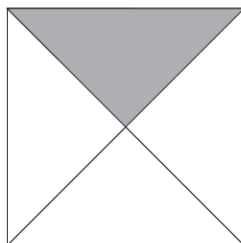
3.



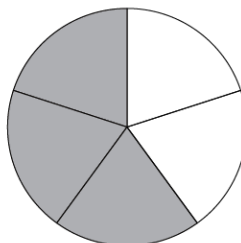
4.



5.




6.




Colour in each shape to represent the percentage shown.

7.




67%

8.




23%

9.




7%

10.



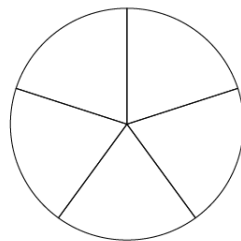
50%

11.



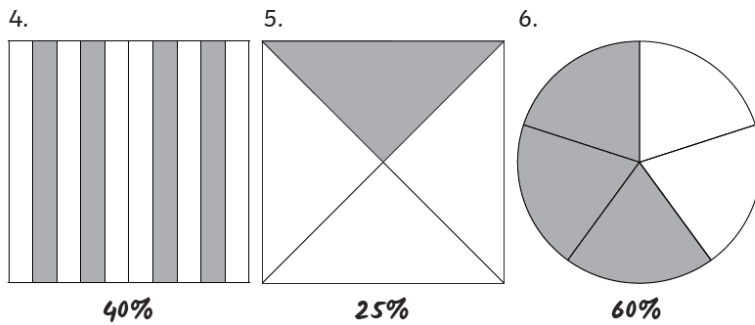
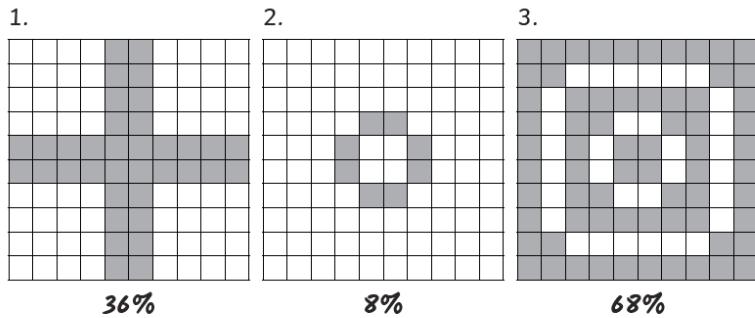
70%

12.



80%

What percentage of each shape is coloured in?



Colour in each shape to represent the percentage shown.

7. 67 of the squares should be coloured in
8. 23 of the squares should be coloured in
9. 7 of the squares should be coloured in

10. 2 of the squares should be coloured in
11. 7 of the rectangles should be coloured in
12. 4 of the pieces should be coloured in