
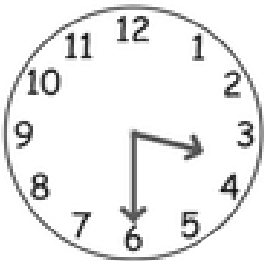


WALT: Read the time to half past the hour

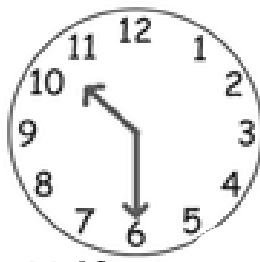
WILF: Long hand on 6 = half past, which hour has the short hand past? Write time.



Match the clock face to the written time.



Half past 3



Half past 1



Half past 10

Now write the times shown on each of the clocks:



half past



half past



half past



