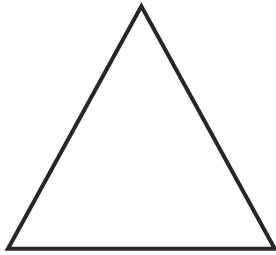



Properties of 2D Shapes

Write down the properties of the shapes.



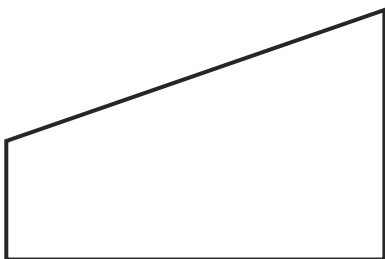
What are the properties of an equilateral triangle?




What are the properties of a square?



What are the properties of a rectangle?



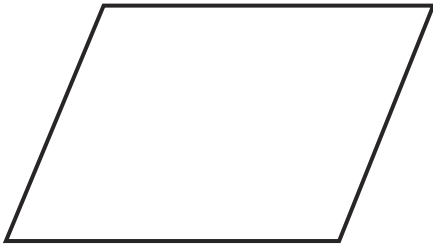
What are the properties of a quadrilateral?



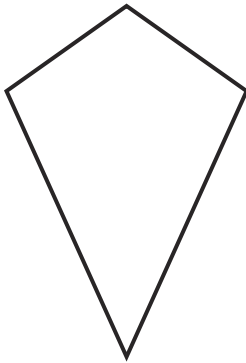
What are the properties of an isosceles triangle?

Properties of 2D Shapes

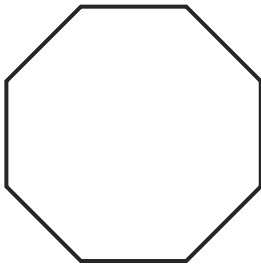
Write down the properties of the shapes.



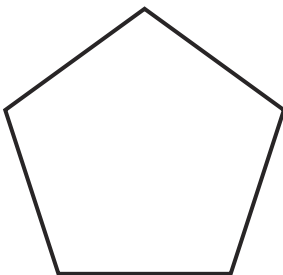
What are the properties of a parallelogram?



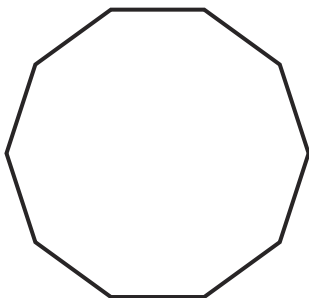
What are the properties of a kite?



What are the properties of an octagon?



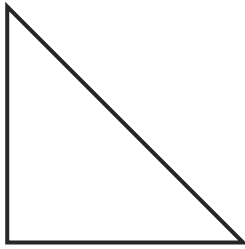
What are the properties of a pentagon?



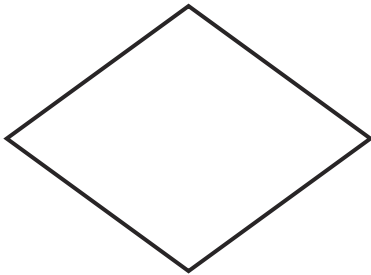
What are the properties of a decagon?

Properties of 2D Shapes

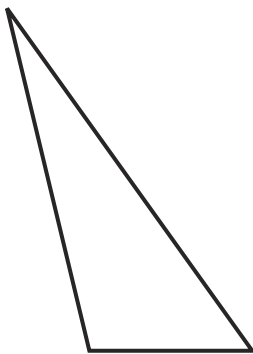
Write down the properties of the shapes.



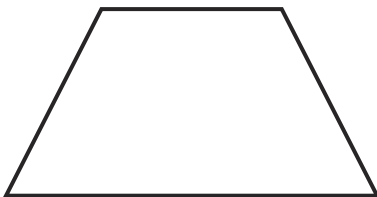
What are the properties of a right-angled triangle?



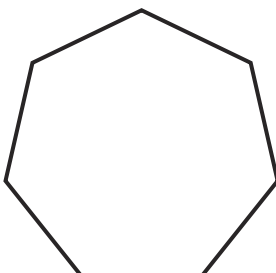
What are the properties of a rhombus?



What are the properties of a scalene triangle?



What are the properties of a trapezium?



What are the properties of a heptagon?
