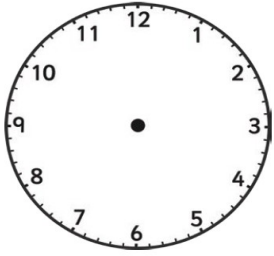
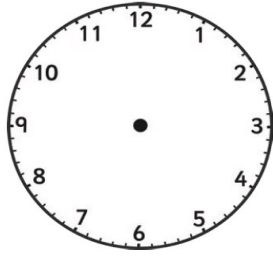


Draw the hands on the clocks to show the time given.

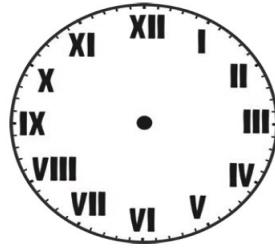
(Remember that the hour hand moves too e.g. at half past, the hour hand is between the current hour and the next hour).



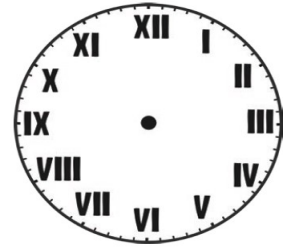
10:20



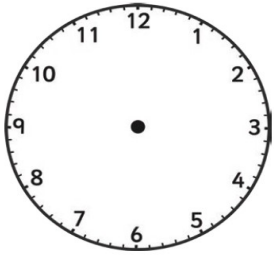
3:40



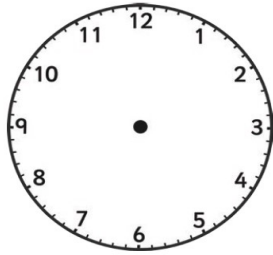
11:55



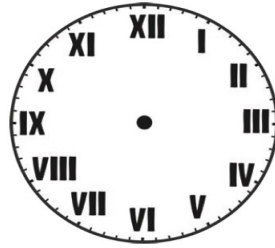
3:05



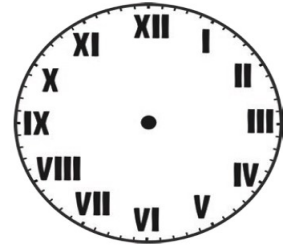
4:12



7:41



2:27



7:11

Write the time in numbers and words



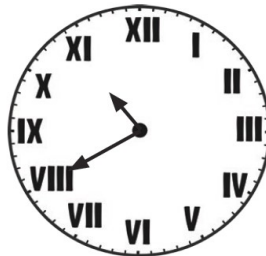
\_\_\_\_\_

\_\_\_\_\_



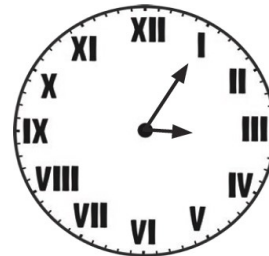
\_\_\_\_\_

\_\_\_\_\_



\_\_\_\_\_

\_\_\_\_\_



\_\_\_\_\_

\_\_\_\_\_



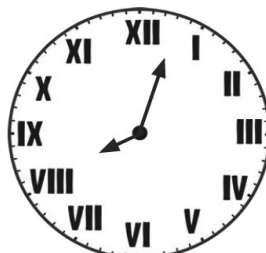
\_\_\_\_\_

\_\_\_\_\_



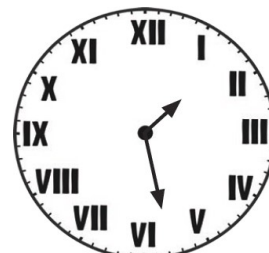
\_\_\_\_\_

\_\_\_\_\_



\_\_\_\_\_

\_\_\_\_\_



\_\_\_\_\_

\_\_\_\_\_

**Challenge** What time is it?



40 minutes before:



an hour and a quarter after:



62 minutes before:



94 minutes after:

\_\_\_\_\_