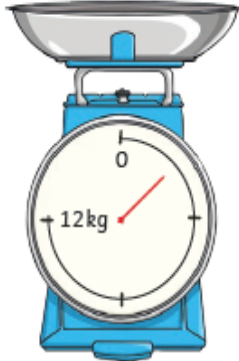

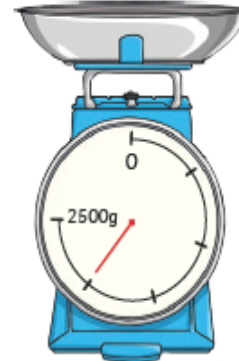

1) What is each interval worth on each set of scales?	Each interval is worth _____	Each interval is worth _____	Each interval is worth _____
2) Mark the mass shown on each set of scales.	350g	48g	225kg

A bag of flour has a mass of 2kg.



			
What is each interval worth on each set of scales?	Each interval is worth _____	Each interval is worth _____	Each interval is worth _____

The pointer shows the mass of one bag of flour on each set of scales.

1) One set is incorrect. Which set?

2) Ali says that the mass of the bag of flour on this set of scales is 800g. Do you agree? Explain your answer.

