


Wednesday - Maths (1)

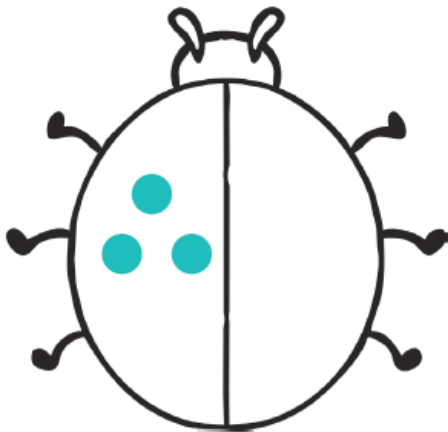
To complete this activity, draw the same amount of dots on the other side of the ladybird. Count how many dots you have altogether to work out the answer.



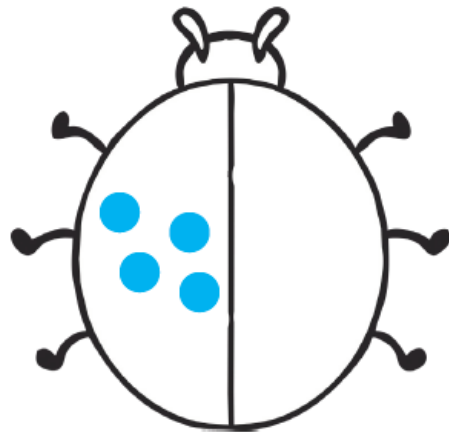
Double 1 is _____




Double 2 is _____



Double 3 is _____



Double 4 is _____

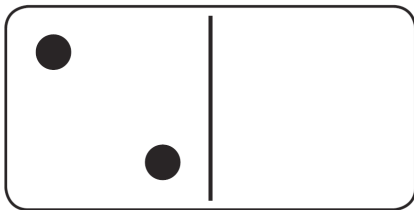



Double 5 is _____

Wednesday - Maths (2)


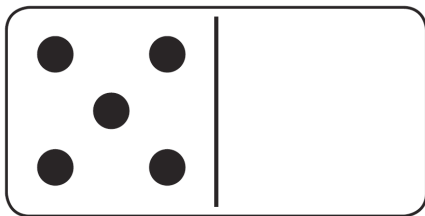
WALT: Double numbers up to 10

WILF: Draw same dots on other side, complete number sentence.




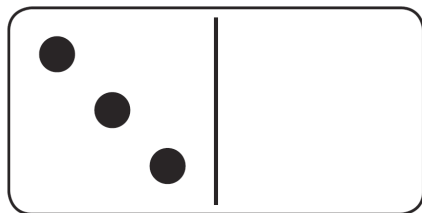
$$\boxed{2} + \boxed{} = \boxed{}$$

Double 2 is _____




$$\boxed{5} + \boxed{} = \boxed{}$$

Double 5 is _____



$$\boxed{3} + \boxed{} = \boxed{}$$

Double 3 is _____



$$\boxed{8} + \boxed{} = \boxed{}$$

Double 8 is _____