


WALT: Tell the time 1 hour before and after


WILF: Read time on clock, 1 hour before? 1 hour after? Write new time.




Write the time that is **1 hour before** the time on each clock.



\_\_\_\_\_ o'clock



half past \_\_\_\_\_



\_\_\_\_\_ o'clock

Write the time that is **1 hour after** the time on each clock.



\_\_\_\_\_ o'clock



half past \_\_\_\_\_




half past \_\_\_\_\_

### Challenge:


Draw the time on each clock that is **1 hour before** the given time.



4 o'clock



half past 1



10 o'clock