


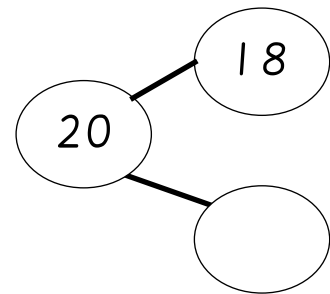
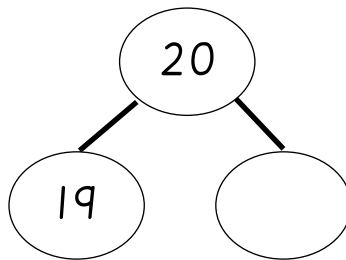
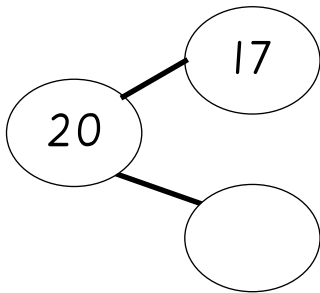
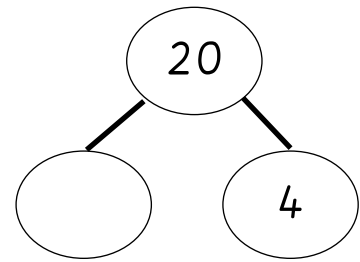
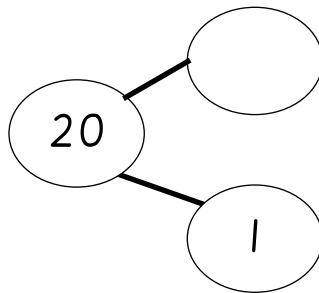
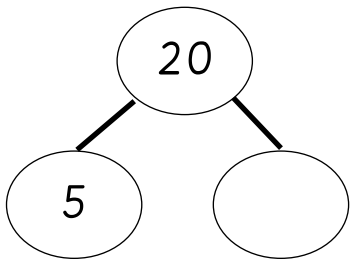
WALT: Practise our number bonds to 20

B/O

WILF: Use number bonds to 20 to find missing numbers, complete calculations.



Can you find the missing number bond to make 20?



Fill in the missing numbers to make 20.

$7 + \underline{\quad} = 20$

$2 + \underline{\quad} = 20$

$6 + \underline{\quad} = 20$

$15 + \underline{\quad} = 20$

$11 + \underline{\quad} = 20$

$10 + \underline{\quad} = 20$

Challenge: Fill in the missing numbers.

I know $5 + 15 = 20$ so... $20 - \underline{\quad} = \underline{\quad}$