

WALT Add by counting on

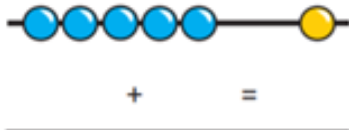
B

Wilf: Count the beads, write the number sentence.

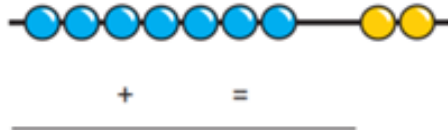


Write in the number sentences.

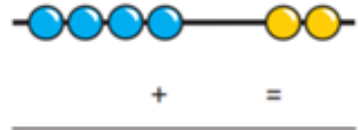
1.



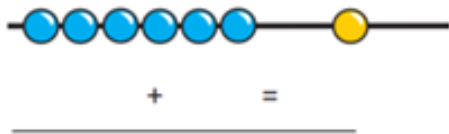
2.



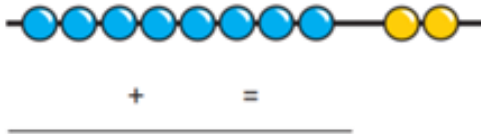
3.



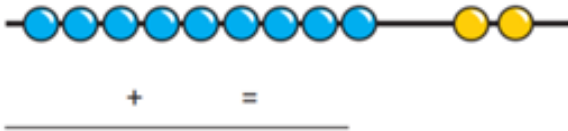
4.



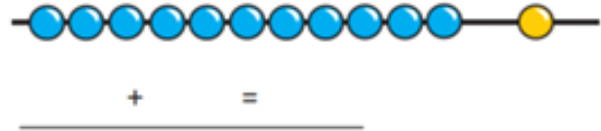
5.



6.



7.



Match the images to the number sentences. Write in the answers.



D. $13 + 5 =$



E. $12 + 4 =$



F. $11 + 6 =$