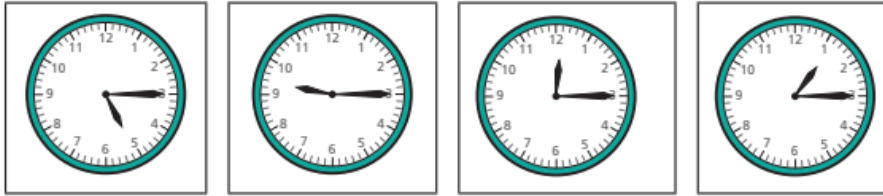


1 Match the clocks to the times.

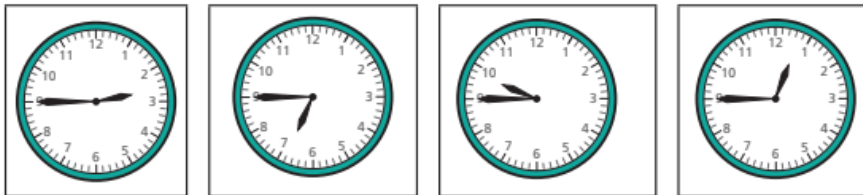


quarter past 1      quarter past 12      quarter past 9      quarter past 5

Complete the sentence.

At quarter past, the minute hand points to

2 Match the clocks to the times.



quarter to 10      quarter to 1      quarter to 7      quarter to 3

Complete the sentence.

At quarter to, the minute hand points to

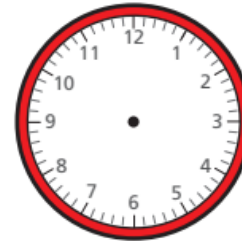
3 Write the time shown on each clock.

Use the word bank to help you.

quarter to      quarter past



4 Draw hands to show the time on each clock.



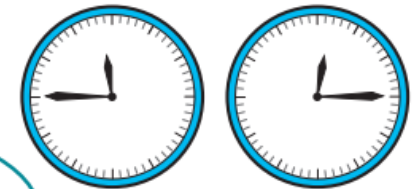
- quarter past 11
- quarter past 3
- quarter to 4
- quarter to 1

5 The clocks have no numerals.

a)



You can still work out what time they show.



Why does Dora think this?

b) Write what time each clock shows.