
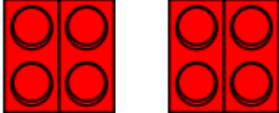


Homework! 13th May

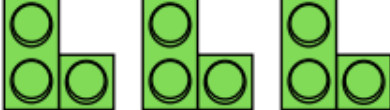
Building Bricks Multiplication


Can you add the bumps on the building bricks to complete these multiplication calculations?

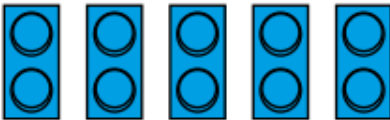
1.  $2 + 2 + 2 = \square$ $3 \times 2 = \square$


2.  $4 + 4 = \square$ $2 \times 4 = \square$

3.  $3 + 3 = \square$ $2 \times 3 = \square$


4.  $3 + 3 + 3 = \square$ $3 \times 3 = \square$


5.  $1 + 1 + 1 + 1 = \square$ $4 \times 1 = \square$

6.  $2 + 2 + 2 + 2 + 2 = \square$ $5 \times 2 = \square$

7.  $1 + 1 + 1 + 1 + 1 + 1 + 1 + 1 = \square$ $8 \times 1 = \square$

8.  $4 + 4 + 4 + 4 = \square$ $4 \times 4 = \square$

9.  $2 + 2 + 2 + 2 + 2 + 2 = \square$ $6 \times 2 = \square$

10.  $4 + 4 + 4 + 4 + 4 = \square$ $5 \times 4 = \square$